

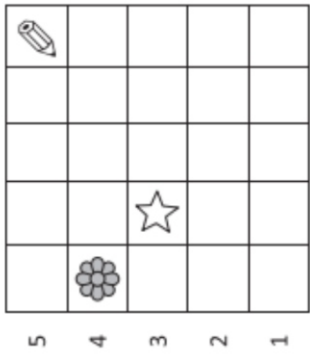
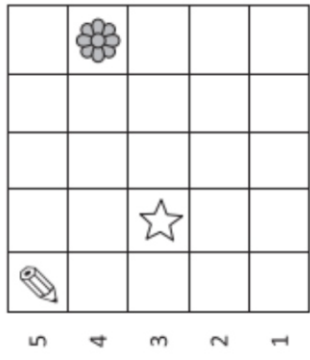
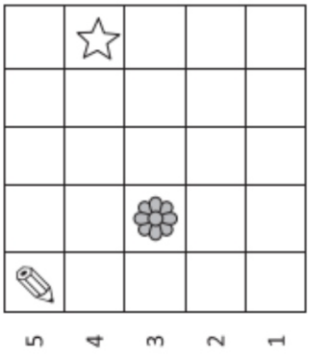
Marco ha posizionato in una griglia:

una  in (B, 3)

un  in (E, 4)

una  in (A, 5)

Qual è la griglia di Marco?

<p>Griglia A</p> <input type="checkbox"/>	 <p>5 4 3 2 1</p> <p>A B C D E</p>
<p>Griglia B</p> <input type="checkbox"/>	 <p>5 4 3 2 1</p> <p>A B C D E</p>
<p>Griglia C</p> <input type="checkbox"/>	 <p>5 4 3 2 1</p> <p>A B C D E</p>

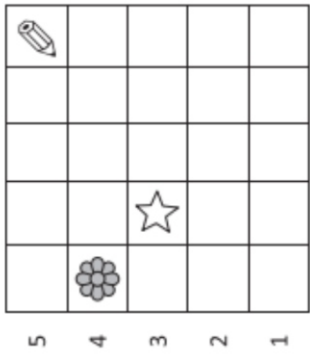
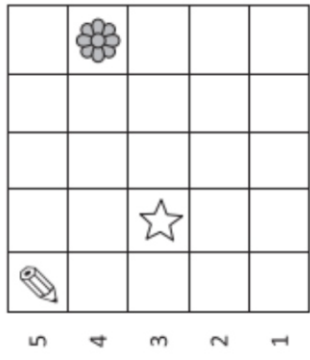
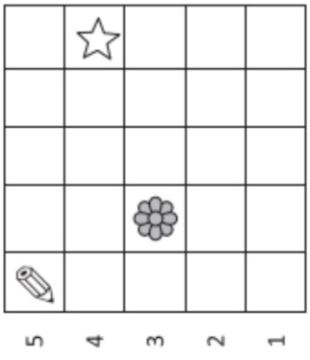
Marco ha posizionato in una griglia:

una  in (B, 3)

un  in (E, 4)

una  in (A, 5)

Qual è la griglia di Marco?

<p>Griglia A</p> <input type="checkbox"/>	 <p>5 4 3 2 1</p> <p>A B C D E</p>
<p>Griglia B</p> <input type="checkbox"/>	 <p>5 4 3 2 1</p> <p>A B C D E</p>
<p>Griglia C</p> <input type="checkbox"/>	 <p>5 4 3 2 1</p> <p>A B C D E</p>

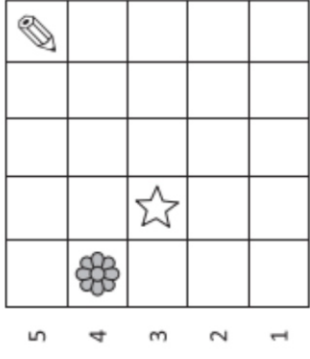
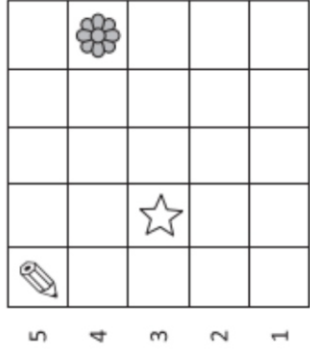
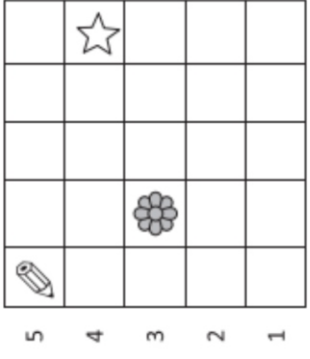
Marco ha posizionato in una griglia:

una  in (B, 3)

un  in (E, 4)

una  in (A, 5)

Qual è la griglia di Marco?

<p>Griglia A</p> <input type="checkbox"/>	 <p>5 4 3 2 1</p> <p>A B C D E</p>
<p>Griglia B</p> <input type="checkbox"/>	 <p>5 4 3 2 1</p> <p>A B C D E</p>
<p>Griglia C</p> <input type="checkbox"/>	 <p>5 4 3 2 1</p> <p>A B C D E</p>